



**INDIAN SCHOOL DARSAIT**  
**REVISION WORKSHEET-Addition Up to 20**  
**MATHEMATICS**



Class : I    Sec : .....

Date : .....

Name: .....

Roll No : .....

I. Choose and write the correct answer:

a) 3 bananas + 8 apples = \_\_\_\_\_ fruits

- i) 17            ii) 11            iii) 13

b) 6 men + 9 women = \_\_\_\_\_ people

- i) 14            ii) 16            iii) 15

II. Count and Add

a) ☆☆☆☆☆ + ☆☆☆☆☆ = \_\_\_\_\_

b) ♥♥♥♥♥ + ♥♥♥♥♥ = \_\_\_\_\_

III. Add.




	T	O
	1	2
+		6

	T	O
	1	0
+		7

	T	O
		8
+		8

	T	O
		5
+		3

IV. Complete the addition in each cupcake.



V. Solve the story sums.

1. Rima has 11 yellow balloons and 7 orange balloons. How many balloons she has in all?

Answer: \_\_\_\_\_

	T	O
+		

2. There were 13 cars in the parking area. Three more cars came in. How many cars are there in the parking area?

Answer: \_\_\_\_\_

	T	O
+		

3. Meena had 12 marbles. She got 2 more from her friend. How many marbles she has in all?

Answer: \_\_\_\_\_

	T	O
+		

4. Danny and Jack had 5 stamps each. How many stamps do they have in all?

Answer: \_\_\_\_\_

	T	O
+		