



INDIAN SCHOOL DARSAIT
 MATHEMATICS
 SHAPES AND PATTERNS
 PRACTICE WORKSHEET



Class: II Sec:

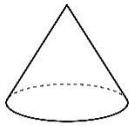
Date:.....

Name:.....

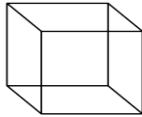
Roll No:.....

I. Match the following:

1.




2.



3.



4.



5.



a.




b.



c.



d.



e.



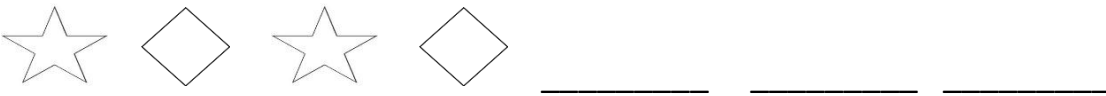
1. () 2. () 3. () 4. () 5. ()

II. Choose the correct answer from the bracket and fill in the blanks:


- A _____ has only 1 curved face. (Cuboid / cone)
- _____ has both flat and curved faces. It can roll and slide. (Cylinder / cube)
- A triangle has _____ corners. (2 / 3)
- Match box represents _____ shape. (rectangle / cuboid)
- _____ has 4 equal sides and 4 corners. (Square / Triangle)
- _____ has 2 opposite sides equal. (Circle / Rectangle)

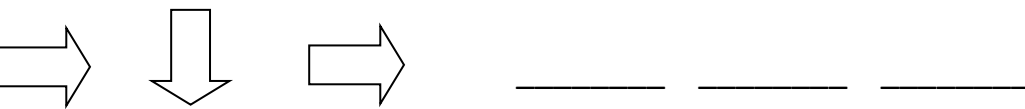
III. Complete the following patterns:

a. 21 23 25 _____ _____ _____ _____

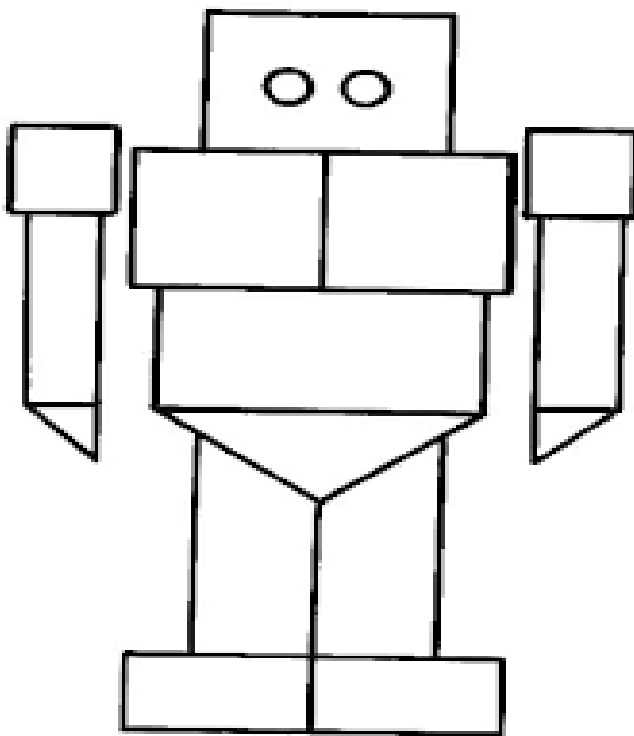
b. 

c. 45 55 65 _____ _____ _____

d. 

e. 

IV. Colour and count the different number of shapes accordingly:



Circle (red) _____

Triangle (green) _____

Square (yellow) _____

Rectangle (blue) _____