



INDIAN SCHOOL DARSAIT
MATHEMATICS
MEASUREMENT
PRACTICE WORKSHEET



Grade : II Div:

Date:.....

Name:.....

Roll No:.....

I Choose the correct answer and fill in the blanks:-

1. The container that can hold more amount of water is a _____

- a) cup b) bucket c) spoon d) jug

2. Lighter objects are measured in _____

- a) litre b) metre c) gram d) kilogram

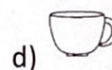
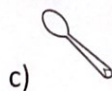
3. _____ is used to measure the length of a cupboard.

- a) metre b) kilogram c) gram d) millilitre

4. The quantity of tea in a cup is measured in _____ .

- a) litre b) metre c) millilitre d) gram

5. Tick the container that can hold more than 1 litre of oil.



II Write the weight of the following:-

S
a)



7 kg

5 kg

=

_____ kg

b)

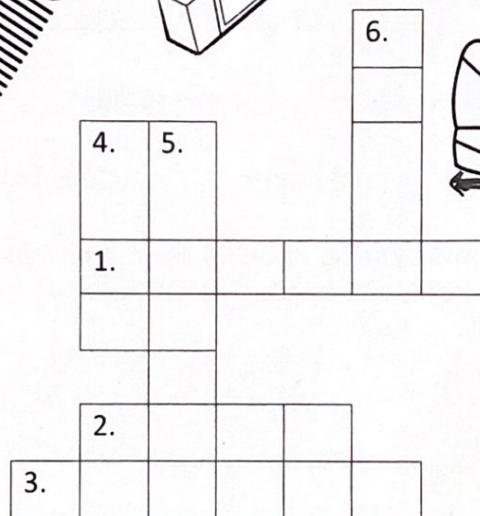
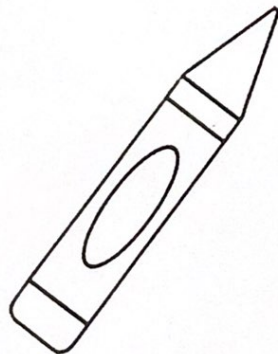
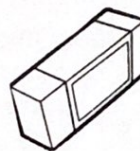
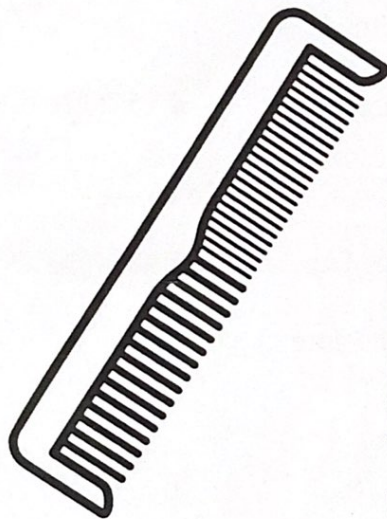



3 kg 4 kg

= _____ kg

III Measure each item and write its name in the crossword puzzle.

(shoe, crayon, pencil, comb, eraser, pen)



Across

- 1) 2 cm
- 2) 8 cm
- 3) 14 cm

Down

- 4) 10 cm
- 5) 6 cm
- 6) 5 cm

