



INDIAN SCHOOL DARSAIT
TERM II – MARCH 2019
SAMPLE PAPER
ENVIRONMENTAL STUDIES



Class:III Sec:

Date:

Name:

Max.Marks:50

Time: 2 hrs.

Roll No:

Q.I Choose the correct answer:

5x½ = 2½

- 1) Air pollution will not cause.
 - a) asthma b) coughing c) rashes d) jaundice
- 2) Water is found on high mountains and polar regions in this form.
 - a) steam b) air c) ice d) water
- 3) The condition of weather that stays for long time.
 - a) Seasons b) Weather c) Storm d) Wind
- 4) Sailors depend on this for directions.
 - a) Ursa Major b) Pole Star c) The Orion d) The Leo
- 5) Part of the plant that supports the branches.
 - a) flower b) root c) stem d) leaves

Q.II Match the following:

5x½ = 2½

(A)

(B)

- | | |
|-------------------|-------------------------------|
| 1) Autumn | a) phases of the moon |
| 2) Climbers | b) water pollution |
| 3) Use of petrol | c) short season before winter |
| 4) Gibbous moon | d) money plant |
| 5) Waste in water | e) air pollution |

1 - _____ 2 - _____ 3 - _____ 4 - _____ 5 - _____

Q.III Fill up the blanks with appropriate words:

5x1 = 5

- 1) Water is essential for all _____ forms.
- 2) We celebrate Holi in _____.
- 3) _____ is a thin layer of air that surrounds the earth.
- 4) Playing in _____ air is good for health.
- 5) _____ have very soft and green stems.

Q.IV Name the following:


4x1 = 4

- 1) The condition of air around us. _____
- 2) The part of plant that holds the plant firmly in the soil. _____
- 3) The substance that gives green colour to the leaves. _____
- 4) The farthest planet from the Sun. _____

Q.V Identify the pictures with the help of given clues:

4x1 = 4

1) Name the season




2) Type of plant



3) Source of water



4) Part of the plant



Q.VI Define the following:

4x1 = 4

1) Photosynthesis= _____

2) Spring Season= _____

3) Rotation = _____

4) Evaporation= _____

Q.VII Give Reason:

4x1 = 4

1) We must reduce the use of vehicles.

Ans: _____

2) We have different seasons in a year.

Ans: _____

3) Water should not be stored in uncovered drums.

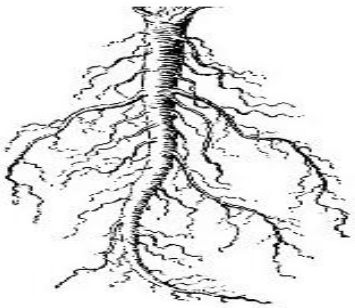


Ans: _____

4) The cotton in the empty glass does not get wet when held upside down in a bucket of water.

Ans: _____

Q.VIII Observe the pictures and do as directed:

4x3 = 12

<p>1.</p> 	<p>a) Name the type of root.</p> <p>_____</p> <p>b) Give two examples.</p> <p>_____</p> <p>c) Write one line about it.</p> <p>_____</p> <p>_____</p> <p>_____</p>
<p>2.</p> 	<p>a) Identify the season.</p> <p>_____</p> <p>b) After which season it is welcomed.</p> <p>_____</p> <p>c) What are the attractions of this season?</p> <p>_____</p> <p>_____</p>
<p>3.</p> 	<p>a) Identify the heavenly body that revolves round the earth.</p> <p>_____</p> <p>b) The other name for it.</p> <p>_____</p> <p>c) Name the astronauts who landed on it.</p> <p>_____</p> <p>_____</p>

4.



a) Identify the method of conserving water.

b) Explain the process.

Q.IX Answer the following:

4x2 = 8

1) Describe spring season in two lines.

Ans: _____

2) Write two reasons for air pollution.

Ans: _____

3) Differentiate between Star and Planet.

Star	Planet

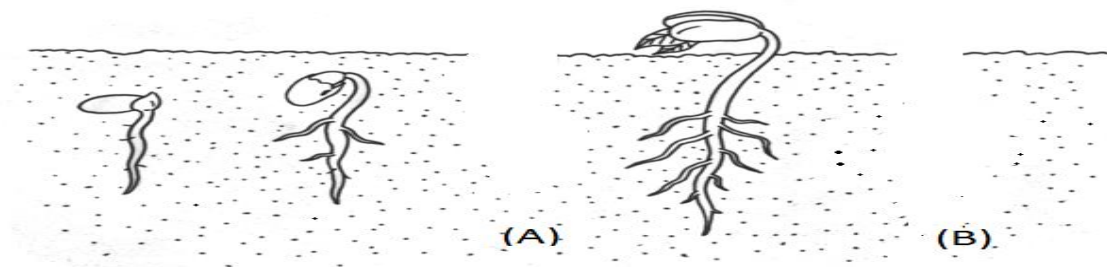
4) Describe the structure of seed in two lines.

Ans: _____

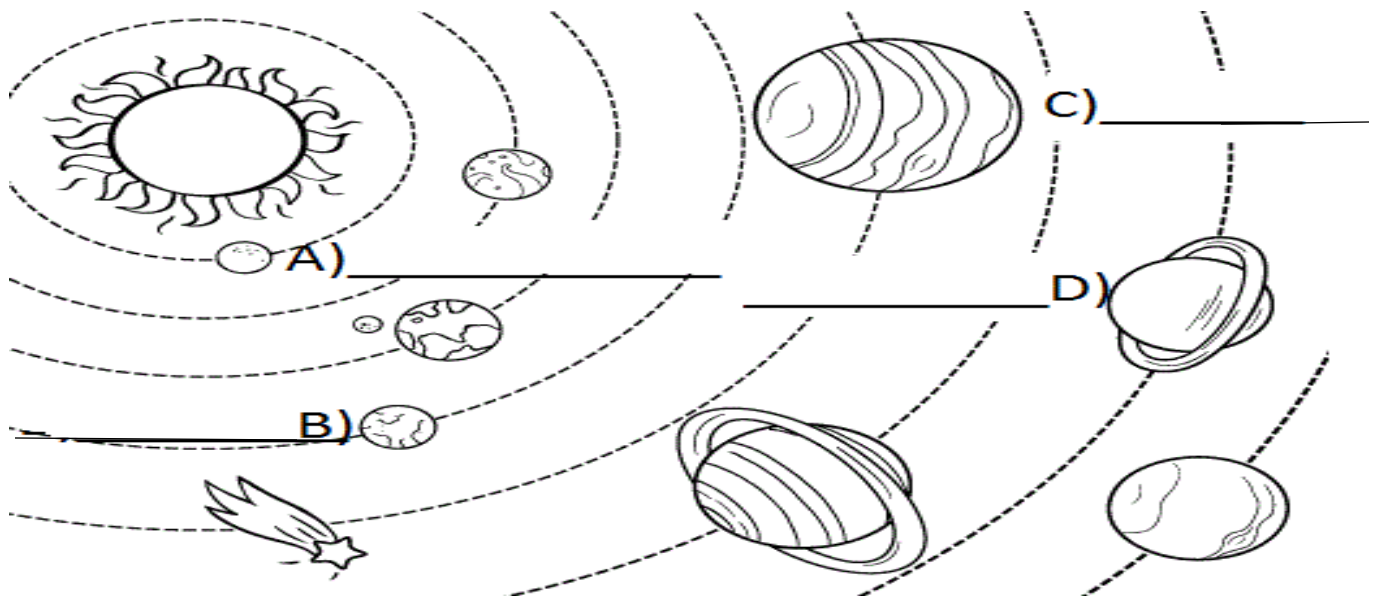
Q.X Do as directed:

2x2 = 4

1. Draw the missing parts and label the diagram.



2. Label the planets A, B, C and D.



Solar System