



**INDIAN SCHOOL DARSAIT
ENVIRONMENTAL STUDIES
REVISION WORKSHEET- 4
TOPICS- SIMPLE MACHINES &
ANIMALS:ADAPTATIONS FOR SURVIVAL**



CLASS: V Div:

Date:.....

Name:.....

Roll No:.....

I Name the following.

- a. Two insects that camouflage. _____
- b A type of screw which is used to lift a car with a small effort. _____
- c. The type of simple machine that all vehicles have. _____
- d Two migratory birds. _____
- e. The organ through which frogs breathe when they are in water. _____

II Define the following

- a. Hibernation:- _____

- b Camouflage:- _____

III. Cite reason.

- a. A screw fixes two wooden pieces firmly than a nail.

IV. Answer the following.

- a. Write any two applications of the following.

1. Pulley

2. Inclined plane

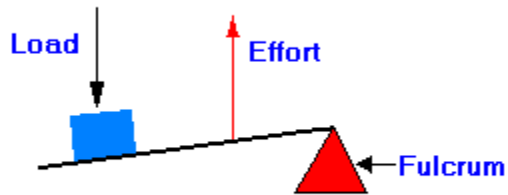
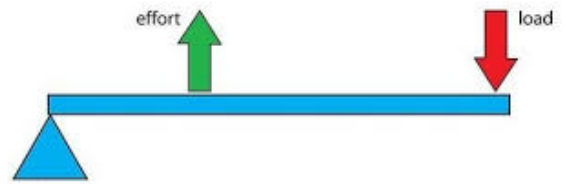
b Write any two adaptations of the following.

1. Monkey:

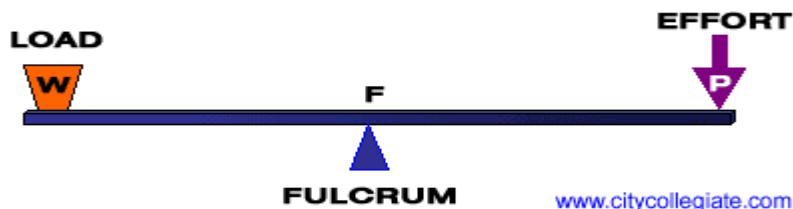
2. Lion

3. Deer and rabbit

V. D' Cruz categorised the levers with their schematic representations. Please check whether they are correct or not. If not correct, help him to correct them.



Class 3 Lever



www.citycollegiate.com First class lever