



INDIAN SCHOOL DARSAIT
DEPARTMENT OF SOCIAL SCIENCE



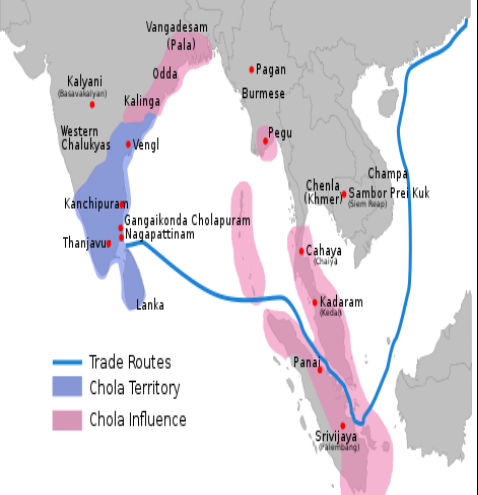


Subject: Social Science **Topic: New Kings and Kingdoms** **Date of Worksheet: 23/04/2019**

Resource Person: Mrs. Raji Rajesh **Date :**

Name of the Student : **Class & Division : VII** **Roll Number :**

I Give one word answer:		
1.	Land donated to Jaina institution _____.	1
2.	Land gifted to temples _____.	1
3.	Land for the maintenance of a school _____.	1
4.	Land gifted to Brahmanas _____.	1
5.	Land of non-Brahmana peasant properties _____.	1
6.	Most famous Chola ruler _____.	1
7.	He built the town of Tanjavur _____.	1
8.	Wealthy temple raided by Mahmud of Ghazni _____.	1
9.	The one who wrote history of kings of Kashmir _____.	1
10.	The book written by Al- Biruni _____.	1
II Fill in the blanks.		
1.	Kings often acknowledged the big land lords or warrior chiefs as their subordinates or _____.	1
2.	As <i>samanthas</i> gained power and wealth, they declared themselves to be _____, _____ and so on.	1
3.	In the mid-eighth century, Dandidurga, a Rashtrakuta chief, overthrew his Chalukya overlord and performed a ritual called _____.	1
4.	_____ were composed by learned Brahmanas, who occasionally helped in the administration.	1
5.	During twelfth century, a long Sanskrit poem containing the history of kings who ruled over Kashmir was composed by _____.	1
6.	Al-Biruni wrote _____.	1
7.	The best known Chahamana ruler was _____.	1
8.	Prithviraja III, who defeated an Afghan ruler named _____ in _____.	1

	1191.		
9.	_____ was the most powerful Chola ruler who ascended the throne in 985 A.D.	1	
10.	The Chola kings gave some rich landowners titles like _____ and _____ as markers of respect.	1	
11.	Each 'Brahmadeya' was looked after by an assembly or _____ of prominent Brahmana landlords.	1	
12.	Settlements of peasants, known as _____, became prosperous with the spread of irrigation and agriculture.	1	
13.	There was a Tripartite Struggle between Palas, Rastrakutas and Pratiharas for controlling fertile region of _____.	1	
III	OBSERVE THE FOLLOWING PICTURES AND ANSWER.		
a.		<ul style="list-style-type: none"> This is a set of _____ plates of 9 th century. These plates are partly written in _____ and _____ languages. The ring with the royal seal indicates that it is an _____ document. 	
b.		<ul style="list-style-type: none"> Among the crafts associated with temples the making of _____ images was the most distinctive. _____ bronze images are considered amongst the finest in the world. While most images were of deities sometimes images were made of - _____ as well. 	
		<p>Who was Rajendra I? What were his achievements?</p> <p>What was the role of Vijayalaya during the period?</p>	2



INDIAN SCHOOL DARSAIT
DEPARTMENT OF SOCIAL SCIENCE